

# SECOND GRADE SUMMER WORK



## A note from the teacher:

Happy Summer!

I can't wait to have you in second grade! I have put together a packet to help you continue to review, learn and grow this summer. Please complete this packet and bring it in on the first day of school. Those who do will receive a special prize!



Miss  
McDonald

## Checklist:

- ☐ Sight Words
- ☐ Reading
- ☐ Math
- ☐ Writing

## Make a weekly schedule for yourself!

MONDAY	Reading
TUESDAY	Math
WEDNESDAY	Sight Words Study
THURSDAY	Writing
FRIDAY	Reading

## Stay in touch :

Please allow for 24 hours for a response.



[mcdonaldc@smsridgefield.org](mailto:mcdonaldc@smsridgefield.org)



# Reading Response

Book: \_\_\_\_\_

Author: \_\_\_\_\_

Start Date: \_\_\_\_\_ End Date: \_\_\_\_\_

I give this book \_\_\_\_ stars because:

---

---

---

This book reminded me of:

---

---

---

After reading this book, I learned:

---

---

---

# Book Review!

By: \_\_\_\_\_

.....

Title: \_\_\_\_\_

Author: \_\_\_\_\_

Illustrator: \_\_\_\_\_

.....



Star rating



Would you recommend this book? Why/Why not?

\_\_\_\_\_

\_\_\_\_\_

\_\_\_\_\_

\_\_\_\_\_

\_\_\_\_\_

\_\_\_\_\_


\_\_\_\_\_

\_\_\_\_\_



# SUMMER READING LOG!

**My goal is to read \_\_\_\_\_ books.**

[illegible]

[illegible]



# MENTAL MATH

$13 - 7 =$

$12 + 5 =$

$13 + 9 =$

$21 - 2 =$

$12 + 13 =$

$22 - 7 =$

$16 - 11 =$

$11 + 9 =$

$16 + 8 =$

$10 - 7 =$

$3 + 18 =$

$15 - 6 =$

$15 - 9 =$

$23 + 15 =$

$12 + 19 =$

$27 - 11 =$

$7 + 15 =$

$22 - 5 =$

$13 - 8 =$

$31 + 4 =$

$23 + 4 =$

$21 - 11 =$

$15 + 7 =$

$11 - 7 =$

$25 - 19 =$

$32 + 7 =$

$22 + 9 =$

$12 - 7 =$

$13 + 9 =$

$22 - 4 =$

$23 - 8 =$

$3 + 26 =$

$23 + 6 =$

$21 - 10 =$

$5 + 19 =$

$12 - 8 =$

# MENTAL MATH

$6 + 9 =$

$19 - 5 =$

$21 + 17 =$

$45 + 3 =$

$12 - 9 =$

$18 - 5 =$

$2 + 20 =$

$26 - 13 =$

$26 + 6 =$

$15 + 6 =$

$42 - 7 =$

$18 - 9 =$

$32 + 8 =$

$25 - 9 =$

$32 + 11 =$

$29 + 18 =$

$17 - 11 =$

$12 - 8 =$

$4 + 21 =$

$23 - 6 =$

$33 + 9 =$

$36 + 5 =$

$19 - 11 =$

$16 - 7 =$

$47 + 7 =$

$23 - 17 =$

$52 + 9 =$

$32 + 3 =$

$31 - 4 =$

$12 - 9 =$

$12 + 11 =$

$22 - 8 =$

$43 + 16 =$

$30 + 14 =$

$11 - 6 =$

$19 - 8 =$





# MONEY MATCH UP



Match each amount of coins with the correct amount of money.



30¢



37¢



5¢



10¢



17¢



15¢



# Telling Time

Circle the correct time.



**12:00**    **2:00**




**2:55**    **3:55**



**2:05**    **2:25**



**6:45**    **7:09**




**9:30**    **8:30**




**4:02**    **4:10**


Draw the hands of the clock to show the given time.




**6:00**




**8:30**




**10:15**



**12:45**



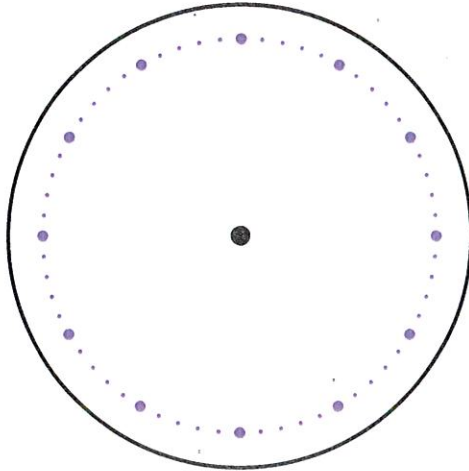
**2:55**



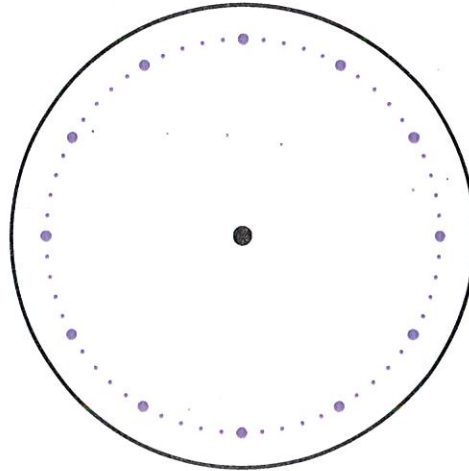
**5:20**

# WHAT TIME IS IT?

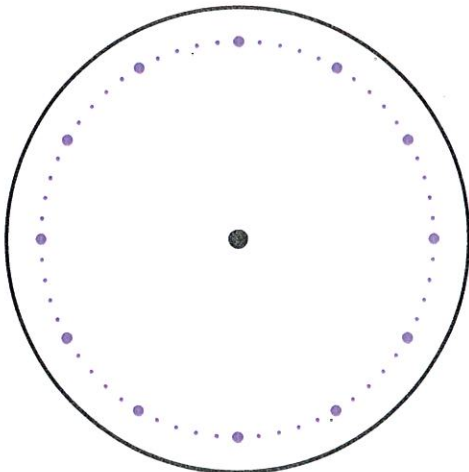
Read the time from the digital clocks.  
Can you set the correct time on the analog  
clocks by drawing the correct hands?



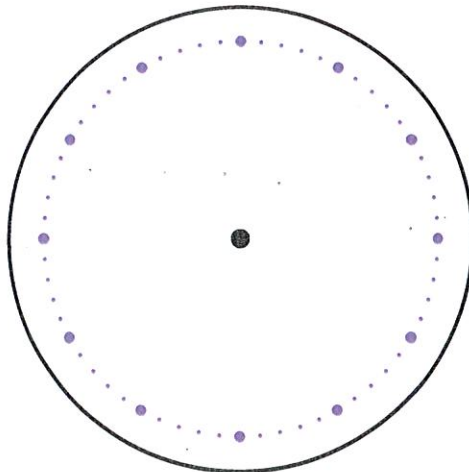
3:30



11:00



7:00



2:45



## MATH TIME!

Put the numbers in order from GREATEST to LEAST! 156, 651, 561, 165

\_\_\_\_\_, \_\_\_\_\_, \_\_\_\_\_, \_\_\_\_\_

Coach has 57 balls in his gym. He also has 34 more jump ropes than balls in the gym. How many jump ropes does Coach have?

Jake made a picture with 306 red and blue stickers. 104 stickers were red. The rest of the stickers were blue. How many stickers are blue?

Sam saw two hundred four birds at the park. Write the number that tells how many birds Sam saw.

Write the number 412 in expanded form: (   +    +   )

## Sight Word Study

Trace the following words:

*about before could first*

Write the following words on the line below:

*little look more other*

\_\_\_\_\_

\_\_\_\_\_

\_\_\_\_\_

\_\_\_\_\_

Match the jumbled words with your sight words and re-write:

*ethir*

*right*

*tanw*

*their*

*their*

*hhwic*

*there*

*eerth*

*want*

*thrig*

*where*

*eerwh*

*which*



Sight word:

have

Trace the words:

have

have

have

Write the sight word two times on the handwriting lines below:

Handwriting practice lines for the word 'have'.

Handwriting practice lines for the word 'have'.

Circle the correct spelling of the word below:

hav

haff

have

hev

Find the word in the word search. It is written twice:

h	f	f	p	h
o	e	v	w	a
v	v	g	i	v
e	a	f	t	e
t	h	t	h	o

Write the word in a sentence below:

Handwriting practice lines for writing the word 'have' in a sentence.

Sight word:

with

Trace the words:

with

with

with

Write the sight word two times on the handwriting lines below:

Handwriting practice lines for the word "with".

Handwriting practice lines for the word "with".

Circle the correct spelling of the word below:

wif

with

wihh

wit

Find the word in the word search. It is written twice:

w	f	t	j	w
o	i	n	w	x
v	n	g	i	h
m	n	f	t	i
w	i	t	h	o

Write the word in a sentence below:

Handwriting practice lines for writing the word "with" in a sentence.



Sight word:

said

Trace the words:

said

said

said

Write the sight word two times on the handwriting lines below:

Handwriting practice lines for the word 'said'.

Handwriting practice lines for the word 'said'.

Circle the correct spelling of the word below:

sed

siad

sayed

said

Find the word in the word search. It is written twice:

n	s	h	a	e
e	a	a	k	a
i	g	a	i	w
a	v	d	a	d
s	a	i	d	t

Write the word in a sentence below:

Handwriting practice lines for writing the word 'said' in a sentence.

# HOMOPHONES

Fill in the blank and circle the correct spelling to complete each sentence.

After school I check to see if any \_\_\_\_\_  
has been delivered.

male  
mail

\_\_\_\_\_ love toasted cheese sandwiches.

I  
eye

The baby bird \_\_\_\_\_ out of its  
nest.

flu  
flew

The little boy \_\_\_\_\_ all his letters  
and numbers.

knew  
new

My grandpa tells great \_\_\_\_\_ from  
his adventures at sea.

tails  
tales

We need to \_\_\_\_\_ our old car.

cell  
sell

\_\_\_\_\_ teacher is the best in the whole school.


our  
hour

We are raising money \_\_\_\_\_ our school.

for  
four




# Persuasive Writing



## Daily Journal

# Week 1

What is the  
best part of the  
summer and  
why?



---

---

---

---

---

---

---


---

---



# Week 2

Which animal  
would make the  
best pet?



---

---

---

---

---

---


---

---

---

# Week 3

Should students  
have homework  
every night?  
Why or why  
not?



---

---

---

---

---

---

---


---

---



# Week 4

Should kids have  
to do chores at  
home?



---

---

---

---

---

---


---

---

---

# Week 5

If I was the  
principal for the  
day, I would...



---

---

---

---

---

---

---

---


---



Copyright © 2010 John Wiley & Sons, Ltd. *J. Forecast.* **30**, 1–16 (2011) DOI: 10.1002/for

1 5






## Narrative Writing

**What was a fun thing you did  
this week?**

Illustrate your writing.



---

---

---

---

---

---

---

---